

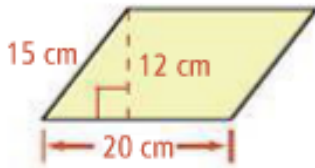
Name: _____
Geometry

Date: _____
Band: _____

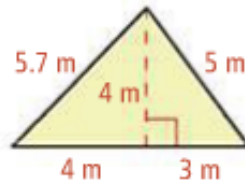
Unit 10: Area PBA Practice

Find the area of each polygon.

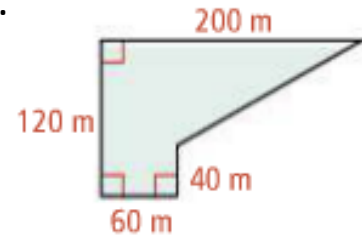
1.



2.



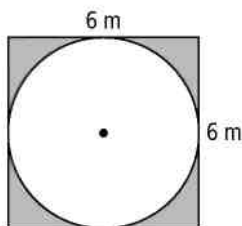
3.



4. A trapezoid has an area of 91 m^2 . The height of the trapezoid is 7 m and the measure of one base is twice the height. What is the measure of the other base of the trapezoid?

Find the area of the shaded region, Leave your answer in terms of π and in simplest radical form.

5.



6.

